

Name: _____

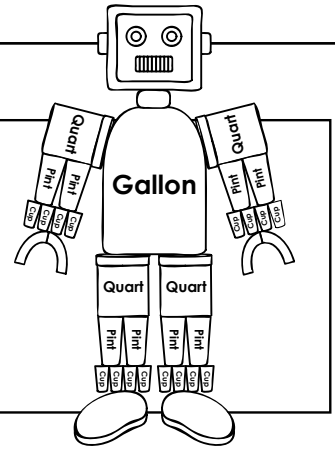
Measuring Capacity

Remember: 1 gallon = 4 quarts = 8 pints = 16 cups

1 gallon = 4 quarts

1 quart = 2 pints

1 pint = 2 cups




Fill in the correct number for each statement.

a. 2 gallons = _____ pints

b. 4 gallons = _____ quarts

c. 3 quarts = _____ pints

d. 6 quarts = _____ cups



Preview

Please log in to download
the printable version of this worksheet.

k. 16 pints or 4 quarts

l. 12 pints or 12 quarts

Circle the best answer and explain.

m. Each day, Isaac feeds his puppy one cup of dog food in the morning and one cup in the evening. How much food does Isaac feed his puppy during a week?

less than 1 gallon

exactly 1 gallon

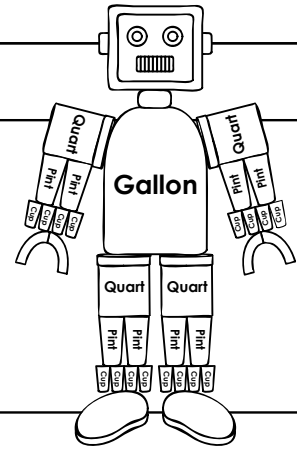
more than 1 gallon

ANSWER KEY

Measuring Capacity

Remember:

- 1 gallon = 4 quarts = 8 pints = 16 cups
- 1 gallon = 4 quarts
- 1 quart = 2 pints
- 1 pint = 2 cups



Fill in the correct number for each statement.

- a.
- c.
- e.
- Circle
- g.
- i.
- k.
- Circle
- m.



than one gallon.
